



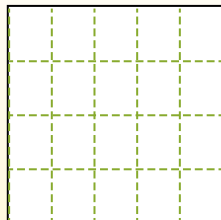
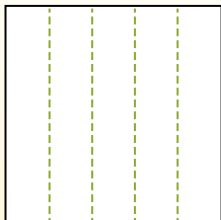

Partition the shape as described and then count to find the number of boxes.

Answers

Rows go left to right.


Columns go up and down.

This has 4 rows and 5 columns.
There are 20 boxes total.




1. _____
2. _____
3. _____
4. _____
5. _____
6. _____
7. _____
8. _____
9. _____


1) 3 rows
2 columns




2) 4 rows
2 columns




3) 2 rows
3 columns




4) 2 rows
4 columns




5) 5 rows
2 columns



6) 2 rows
2 columns




7) 3 rows
4 columns



8) 5 rows
4 columns



9) 4 rows
3 columns



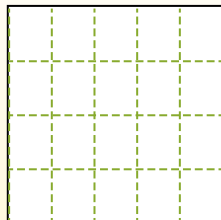
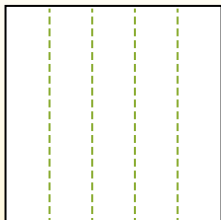



Partition the shape as described and then count to find the number of boxes.

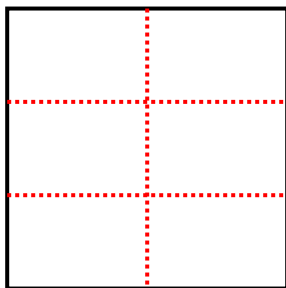
Rows go left to right.

Columns go up and down.

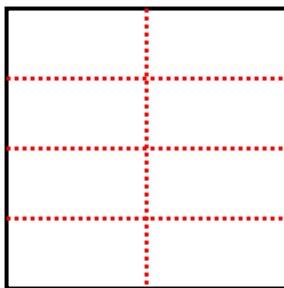
This has 4 rows and 5 columns.
There are 20 boxes total.



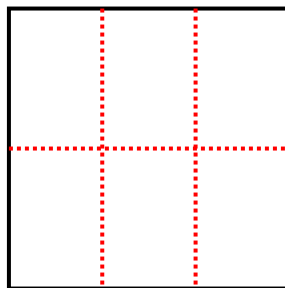
1) 3 rows
2 columns



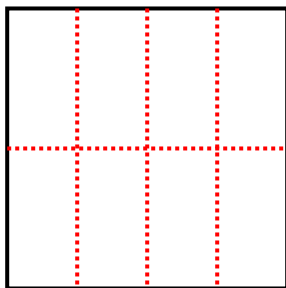
2) 4 rows
2 columns



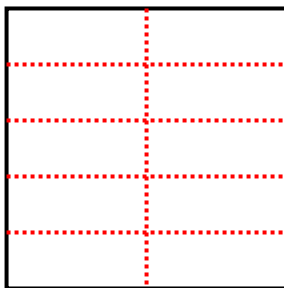
3) 2 rows
3 columns



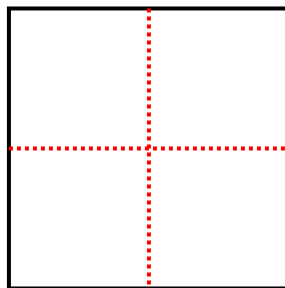
4) 2 rows
4 columns



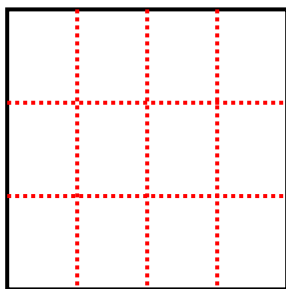
5) 5 rows
2 columns



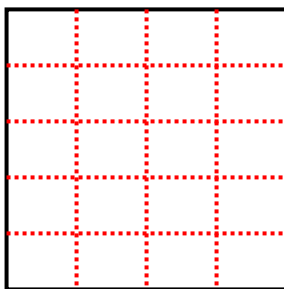
6) 2 rows
2 columns



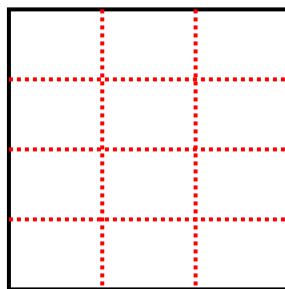
7) 3 rows
4 columns



8) 5 rows
4 columns



9) 4 rows
3 columns



Answers

1. 6

2. 8

3. 6

4. 8

5. 10

6. 4

7. 12

8. 20

9. 12